



Please write clearly in block capitals.

Centre number

--	--	--	--	--

Candidate number

--	--	--	--

Surname _____

Forename(s) _____

Candidate signature _____

I declare this is my own work.

GCSE MATHEMATICS

H


Higher Tier Paper 2 Calculator

Time allowed: 1 hour 30 minutes

Materials

For this paper you must have:

- a calculator
- mathematical instruments.



Instructions

- Use black ink or black ball-point pen. Draw diagrams in pencil.
- Fill in the boxes at the top of this page.
- Answer **all** questions.
- You must answer the questions in the spaces provided. Do not write outside the box around each page or on blank pages.
- If you need extra space for your answer(s), use the lined pages at the end of this book. Write the question number against your answer(s).
- Do all rough work in this book. Cross through any work you do not want to be marked.

Information

- The marks for questions are shown in brackets.
- The maximum mark for this paper is 80.
- You may ask for more answer paper, graph paper and tracing paper. These must be tagged securely to this answer book.

Advice

In all calculations, show clearly how you work out your answer.

For Examiner's Use	
Pages	Mark
2–3	
4–5	
6–7	
8–9	
10–11	
12–13	
14–15	
16–17	
18–19	
20–21	
22–23	
24	
TOTAL	



Answer **all** questions in the spaces provided.Do not write
outside the
box

- 1** Circle the factor of $x^2 - 5x$ **[1 mark]**

$x - 1$

$-5x$

$x - 5$

$5x$

- 2** A is half of B .
Work out the ratio $A : B$
Circle your answer. **[1 mark]**

$1 : 2$

$2 : 1$

$1 : 3$

$3 : 1$

- 3** The first three terms of a geometric progression are $\frac{2}{3}$ $\frac{4}{9}$ $\frac{8}{27}$
Circle the fourth term. **[1 mark]**

$\frac{10}{81}$

$\frac{14}{81}$

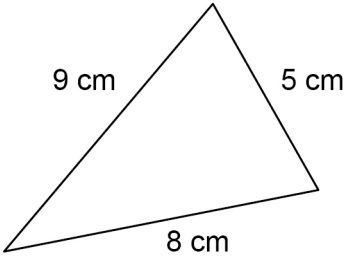
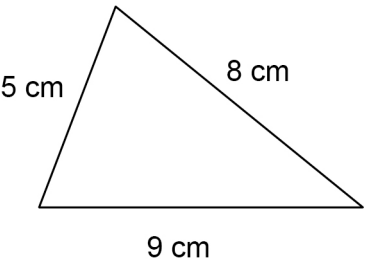
$\frac{16}{81}$

$\frac{32}{81}$



Do not write
outside the
box

4



Not drawn
accurately

Circle the reason why these triangles are congruent.

[1 mark]

ASA RHS SAS SSS

5

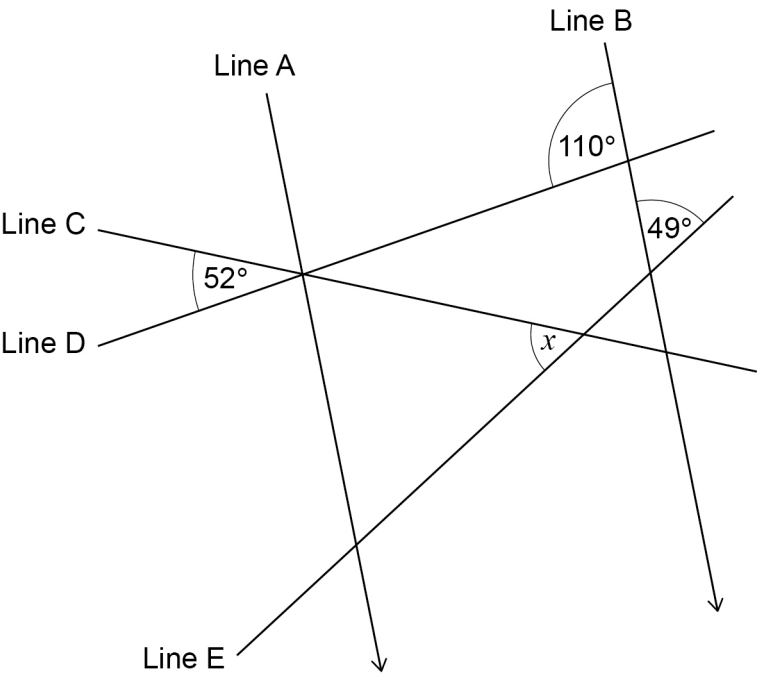
Solve $10x = 62.4 - 3x$

[2 marks]

$x =$ _____



- 6 Lines A, B, C, D and E intersect as shown.
Lines A and B are parallel.



Not drawn
accurately

Work out the size of angle x .

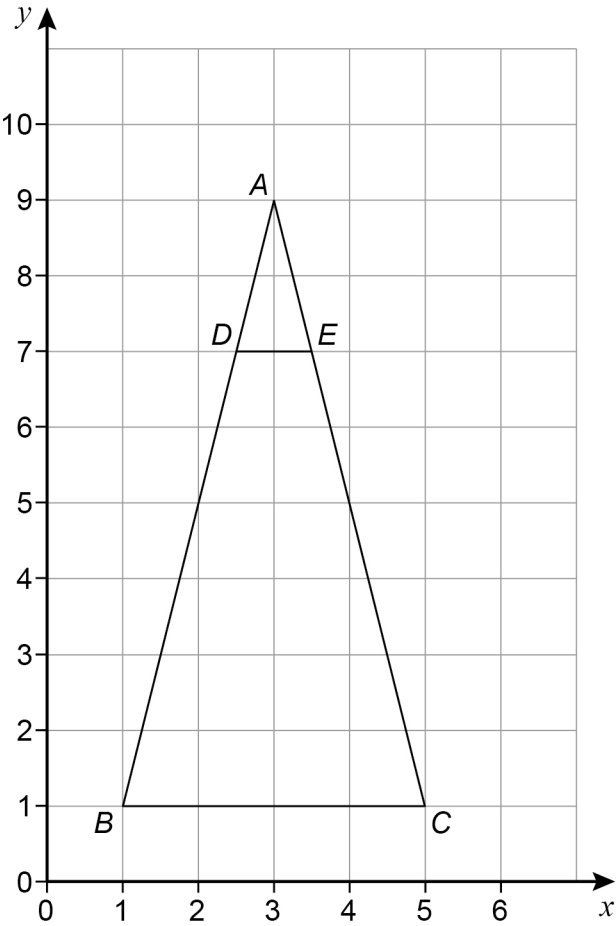
[3 marks]

Answer _____ degrees



Do not write
outside the
box

8



Describe fully the **single** transformation that maps triangle *ABC* to triangle *ADE*.

[3 marks]



10

p is a positive number.

n is a negative number.

For each statement, tick the correct box.

[4 marks]

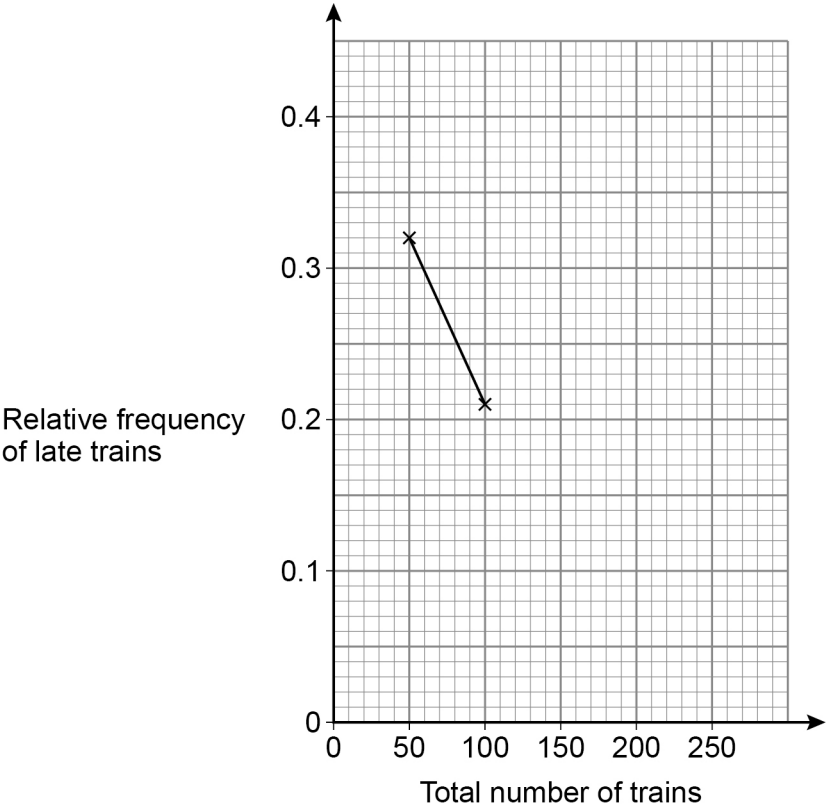
	Always true	Sometimes true	Never true
$p + n$ is positive	<input type="checkbox"/>	<input type="checkbox"/>	<input type="checkbox"/>
$p - n$ is positive	<input type="checkbox"/>	<input type="checkbox"/>	<input type="checkbox"/>
$p^2 + n^2$ is positive	<input type="checkbox"/>	<input type="checkbox"/>	<input type="checkbox"/>
$p^3 \div n^3$ is positive	<input type="checkbox"/>	<input type="checkbox"/>	<input type="checkbox"/>
<hr/>			
<hr/>			
<hr/>			
<hr/>			
<hr/>			
<hr/>			
<hr/>			



- 11
- 250 trains arrived at a station.
The number of trains that were late was recorded after every 50 trains.
The table shows some information about the results.

Total number of trains	50	100	150	200	250
Total number of late trains	16	21	36	38	55
Relative frequency of late trains	0.32	0.21			

- 11 (a)
- Complete the relative frequency graph.
- [3 marks]



- 11 (b)
- Write down the best estimate of the probability that a train arriving at the station is late.
- [1 mark]

Answer _____



Do not write
outside the
box

13 A straight line
 has gradient 6
 and
 passes through the point (3, 19)

Work out the equation of the line.

Give your answer in the form $y = mx + c$

[3 marks]

Answer _____

Turn over for the next question



14 The population of butterflies in a park is 4200

14 (a) Assume that the population increases by 12% each day.

Show that after 20 days the population would be greater than 40 000

[2 marks]

14 (b) In fact, the population
 increases by 13% each day for 19 days
 then
 decreases by 8% for 1 day.

After the 20 days, is the actual population greater than 40 000 ?

Tick a box.

☐

Yes

☐

No

Show working to support your answer.

[2 marks]



Do not write
outside the
box

14 (c) The expected number of visitors to the park each day depends on the temperature.

Temperature	Expected number of visitors each day
Less than 21°C	700
21°C or more	900

On each of the 30 days in June
the park is open
the probability that the temperature is less than 21°C is 0.4

Work out the **total** number of expected visitors to the park in June.

[3 marks]

Answer _____



Do not write
outside the
box

15 L is directly proportional to D^2
 $L = 85$ when $D = 10$

15 (a) Work out an equation connecting L and D .

[3 marks]

Answer _____

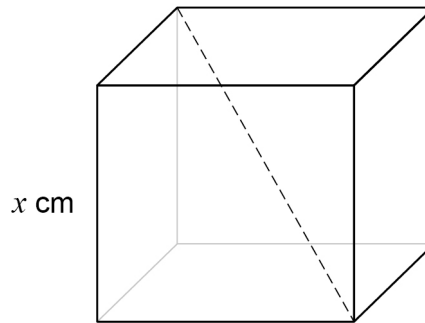
15 (b) Work out the value of L when $D = 5$

[2 marks]

Answer _____



- 16** Here is a cube with edge length x cm
One diagonal is shown.



- 16 (a)** Circle the length, in centimetres, of the diagonal.

[1 mark]

$\sqrt{3}x$

$\sqrt[3]{3x^2}$

$\sqrt{x^3}$

$\sqrt[3]{3}x$

- 16 (b)** The total length, in centimetres, of the edges of the cube is a multiple of 18
Circle the correct statement.

[1 mark]

x is a
whole number

x is not a
whole number

x might be a
whole number

Turn over for the next question

Turn over ►



17 20 people were asked which device they used more often, laptop or phone.
The table shows the results.

	Laptop	Phone
Male	2	9
Female	4	5

17 (a) One male and one female are chosen at random.

Work out the probability that **exactly** one of them said laptop.

[3 marks]

Answer _____

17 (b) Two males are chosen at random.

Work out the probability that they **both** said phone.

[2 marks]

Answer _____



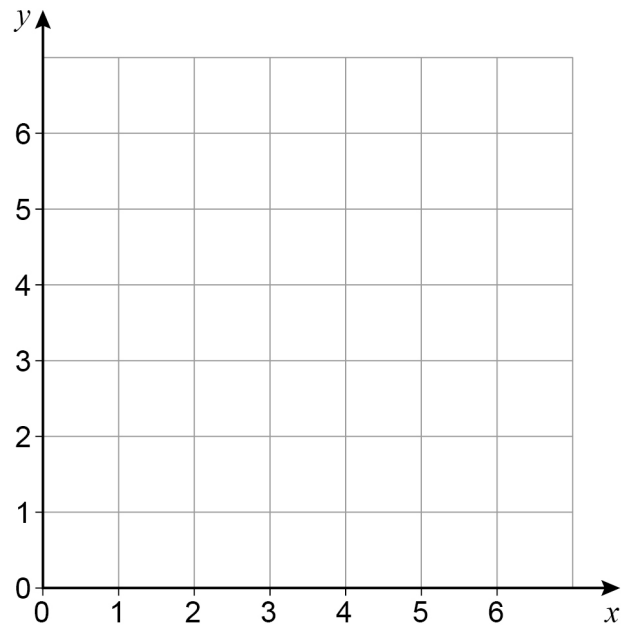
Do not write
outside the
box

18 On the grid, identify the region represented by

$x \leq 5$ $y \leq 4$ $x + y > 6$

Label the region R.

[3 marks]



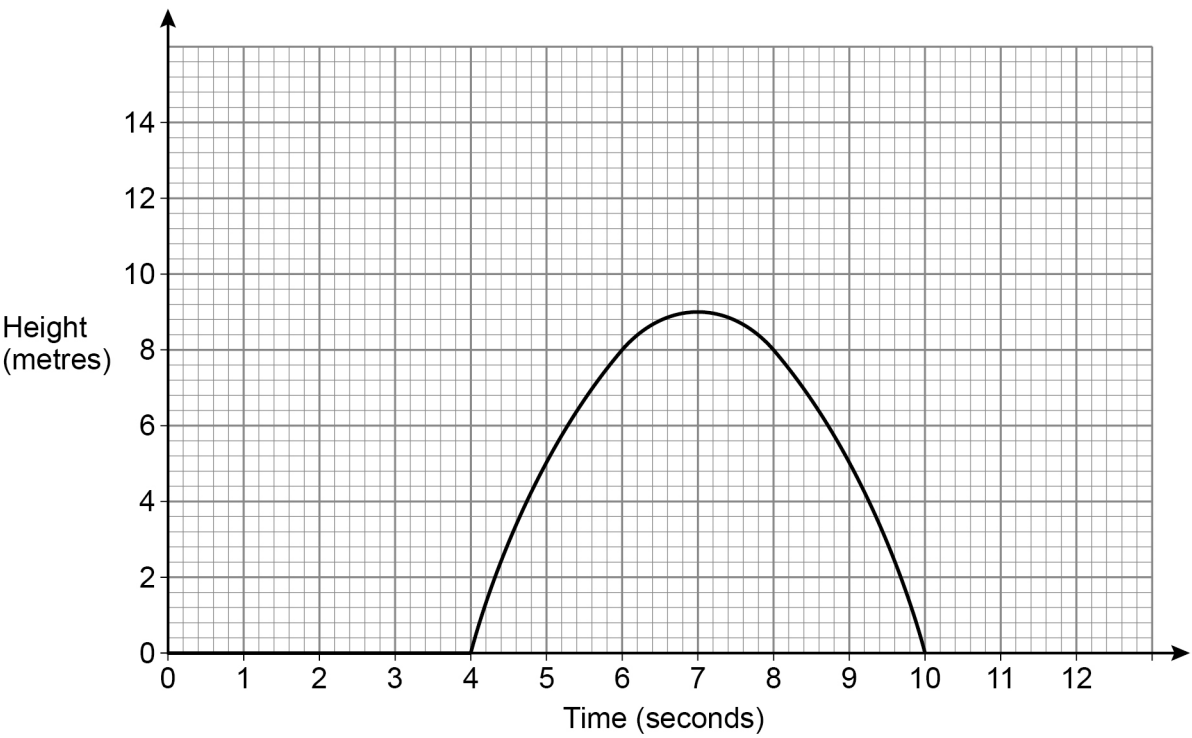
Turn over for the next question

Turn over ►



Do not write
outside the
box

19 The graph shows the height above ground of a toy rocket for 10 seconds.



19 (a) For how long is the rocket in the air?
Circle your answer.

[1 mark]

- 10 seconds 9 seconds 6 seconds 4 seconds



Do not write
outside the
box

19 (b) Using the graph, estimate the speed of the rocket after 6 seconds.
State the units of your answer.

[3 marks]

Answer _____

20 A square has an area of 0.25 square metres.
Circle the length, in **centimetres**, of one side of the square.

[1 mark]

0.5 cm 5 cm 50 cm 500 cm

Turn over for the next question



Do not write
outside the
box

22 Liam is trying to remember a 3-digit code.
He knows the rule that

the first digit is a cube number
the second digit is a factor of 16
the third digit is an odd number.

Liam tries at random a code that matches the rule.
Work out the probability that this is the correct code.

[4 marks]

Answer _____

8

Turn over ►



Do not write
outside the
box

25 The equation of a curve is $y = x^2 + 14x + 52$

By completing the square, work out the coordinates of the turning point.
You **must** show your working.

[3 marks]

Answer (,)

END OF QUESTIONS



There are no questions printed on this page

*Do not write
outside the
box*

**DO NOT WRITE ON THIS PAGE
ANSWER IN THE SPACES PROVIDED**



